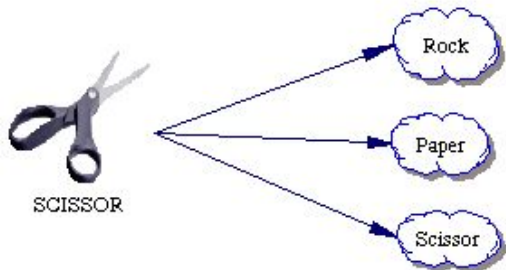
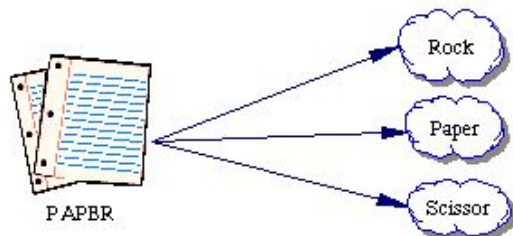
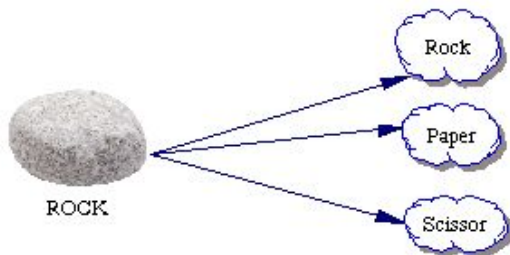


# Rock-Paper-Scissors

## Student Worksheet

PLAYER  
"A"

PLAYER  
"B"



ROCK  
PAPER  
SCISSOR

Name: \_\_\_\_\_ Class: \_\_\_\_\_

How many possible outcomes  
are there for two players ?

\_\_\_\_\_

From all possible outcomes how  
many times would player "A" win ?

\_\_\_\_\_

Express your answer as a fraction ?

\_\_\_\_\_

Express your answer as a % ?

\_\_\_\_\_

From all possible outcomes how  
many times would player "B" win ?

\_\_\_\_\_

Express your answer as a fraction ?

\_\_\_\_\_

Express your answer as a % ?

\_\_\_\_\_

From all possible outcomes how  
many times would both players tie ?

\_\_\_\_\_

Express your answer as a fraction ?

\_\_\_\_\_

Express your answer as a % ?

\_\_\_\_\_